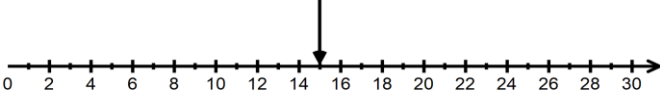


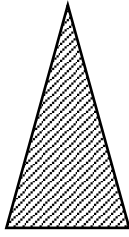
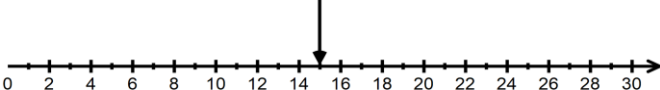


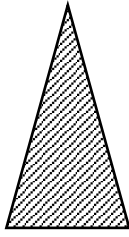


Name

Skills Check 1B

1	<p>Write down the number shown</p>  <div style="display: inline-block; border: 1px solid black; width: 150px; height: 40px; vertical-align: middle; margin-left: 100px;"></div>	1
2	<p>Fill in the missing numbers</p> $60 + 7 = \square$ $40 + \square = 67$ $37 + \square = 67$ $17 + \square = 67$	4
3	<p>Work out</p> $35 + 15 = \square$ $48 - 6 = \square$ $55 + 36 = \square$ $62 - 23 = \square$	4
4	<p>Fill in the missing numbers</p> $16 + \square = 20$ $20 - 16 = \square$ $\square + 11 = 20$ $20 - 9 = \square$	4
5	<p>Work out</p> $6 \times 5 = \square$ $60 \div 10 = \square$ $9 \times 2 = \square$ $45 \div 5 = \square$	4
6	<p>Shade $\frac{1}{2}$ of each shape</p> 	2
7	<p>Write down a way of paying 75p using only silver coins.</p> <div style="border: 1px solid black; height: 40px; width: 100%; margin-top: 10px;"></div>	1
8	<p>What time is shown on the clock?</p>  <div style="border: 1px solid black; height: 30px; width: 100%; margin-top: 10px;"></div>	<p>9 Fill in the missing blanks about the shape</p>  <p>The <small>Name of the shape</small></p> <p>has edges</p>
Date	<p>Total</p> <div style="border: 1px solid black; width: 100px; height: 40px; margin-top: 5px;"></div>	

1	<p>Write down the number shown</p>  <div style="border: 1px solid black; padding: 5px; display: inline-block; margin-left: 200px;">15</div>	1
2	<p>Fill in the missing numbers</p> $60 + 7 = 67$ $40 + 27 = 67$ $37 + 30 = 67$ $17 + 57 = 67$	4
3	<p>Work out</p> $35 + 15 = 50$ $48 - 6 = 42$ $55 + 36 = 91$ $62 - 23 = 39$	4
4	<p>Fill in the missing numbers</p> $16 + 4 = 20$ $20 - 16 = 4$ $9 + 11 = 20$ $20 - 9 = 11$	4
5	<p>Work out</p> $6 \times 5 = 30$ $60 \div 10 = 6$ $9 \times 2 = 18$ $45 \div 5 = 9$	4
6	<p>$\frac{1}{2}$ of each shape shaded</p> 	2
7	<p>Write down a way of paying 75p using only silver coins.</p> <div style="border: 1px solid black; padding: 10px; margin: 10px auto; width: 80%;"> <p>50p, 20p, 10p, 5p coins listed with a total of 75p</p> </div>	1
8	<div style="display: flex; justify-content: space-between;"> <div data-bbox="76 1637 719 2018"> <p>What time is shown on the clock?</p>  <div style="border: 1px solid black; padding: 5px; margin-top: 10px; text-align: center;"> <p>Quarter past 10</p> </div> </div> <div data-bbox="719 1637 1520 2018"> <p>9 Fill in the missing blanks about the shape</p>  <p style="text-align: right; margin-right: 20px;">Name of the shape</p> <p>The triangle</p> <p>has 3 edge</p> </div> </div>	3
<p>Date</p>		<p style="text-align: right;">Total</p> <div style="border: 1px solid black; width: 40px; height: 40px; margin: 0 auto; text-align: center; line-height: 40px;">23</div>