



















Name	
COMPLETING THE SQUARE	Express in completed square form
	1. $x^2 + 4x + 8$
	2. $x^2 - 8x + 18$
	3. $x^2 + 6x + 2$
	4. $x^2 - 6x - 2$
	5. $x^2 - 2x - 8$
   EXIT TICKET	

Name	
COMPLETING THE SQUARE	Express in completed square form
	1. $x^2 + 4x + 8$
	2. $x^2 - 8x + 18$
	3. $x^2 + 6x + 2$
	4. $x^2 - 6x - 2$
	5. $x^2 - 2x - 8$
   EXIT TICKET	

Name	
COMPLETING THE SQUARE	Express in completed square form
	1. $x^2 + 4x + 8$
	2. $x^2 - 8x + 18$
	3. $x^2 + 6x + 2$
	4. $x^2 - 6x - 2$
	5. $x^2 - 2x - 8$
   EXIT TICKET	

Name	
COMPLETING THE SQUARE	Express in completed square form
	1. $x^2 + 4x + 8$
	2. $x^2 - 8x + 18$
	3. $x^2 + 6x + 2$
	4. $x^2 - 6x - 2$
	5. $x^2 - 2x - 8$
   EXIT TICKET	

Name	
COMPLETING THE SQUARE	Express in completed square form
	1. $x^2 + 4x + 8$
	2. $x^2 - 8x + 18$
	3. $x^2 + 6x + 2$
	4. $x^2 - 6x - 2$
	5. $x^2 - 2x - 8$
   EXIT TICKET	

Name	
COMPLETING THE SQUARE	Express in completed square form
	1. $x^2 + 4x + 8$
	2. $x^2 - 8x + 18$
	3. $x^2 + 6x + 2$
	4. $x^2 - 6x - 2$
	5. $x^2 - 2x - 8$
   EXIT TICKET	

EXIT TICKET

COMPLETING THE SQUARE

1. $x^2 + 4x + 8$

2. $x^2 - 8x + 18$

3. $x^2 + 6x + 2$

4. $x^2 - 6x - 2$

5. $x^2 - 2x - 8$

ANSWERS

$(x + 2)^2 + 4$

$(x - 4)^2 + 2$

$(x + 3)^2 - 7$

$(x - 3)^2 - 11$

$(x - 1)^2 - 9$

Who hasn't got it yet.....