



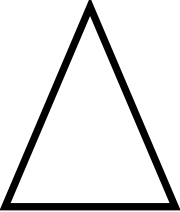
Name

Skills Check 1A

1	<div style="display: flex; justify-content: space-around; margin-bottom: 10px;"> <div style="border: 1px solid black; width: 100px; height: 40px;"></div> <div style="border: 1px solid black; width: 100px; height: 40px;"></div> </div>	2																														
2	<table border="1" style="margin: auto; border-collapse: collapse;"> <tr><td>31</td><td>32</td><td>33</td><td>34</td><td>35</td><td>36</td><td>37</td><td>38</td><td>39</td><td>40</td></tr> <tr><td>41</td><td>42</td><td>43</td><td>44</td><td>45</td><td>46</td><td>47</td><td>48</td><td>49</td><td>50</td></tr> <tr><td>51</td><td>52</td><td>53</td><td>54</td><td>55</td><td>56</td><td>57</td><td>58</td><td>59</td><td>60</td></tr> </table>	31	32	33	34	35	36	37	38	39	40	41	42	43	44	45	46	47	48	49	50	51	52	53	54	55	56	57	58	59	60	1
31	32	33	34	35	36	37	38	39	40																							
41	42	43	44	45	46	47	48	49	50																							
51	52	53	54	55	56	57	58	59	60																							
3	<p>Fill in the missing numbers</p> <div style="display: flex; justify-content: space-around; margin-top: 10px;"> <div style="text-align: center;"> $50 + 2 = \square$ $40 + 3 = \square$ </div> <div style="text-align: center;"> $30 + 5 = \square$ $20 + 7 = \square$ </div> </div>	4																														
4	<p>Work out</p> <div style="display: flex; justify-content: space-around; margin-top: 10px;"> <div style="text-align: center;"> $36 + 3 = \square$ $47 - 4 = \square$ </div> <div style="text-align: center;"> $28 + 10 = \square$ $53 - 20 = \square$ </div> </div>	4																														
5	<p>Fill in the missing numbers</p> <div style="display: flex; justify-content: space-around; margin-top: 10px;"> <div style="text-align: center;"> $3 + \square = 10$ $10 - 3 = \square$ </div> <div style="text-align: center;"> $\square + 4 = 10$ $10 - 6 = \square$ </div> </div>	4																														
6	<p>If there are 2 balls in each bag, how many balls are there altogether?</p> <div style="display: flex; align-items: center; margin-top: 10px;"> <div style="border: 1px solid black; width: 60px; height: 40px; display: flex; align-items: center; justify-content: center;"> </div> balls </div>	1																														
7	<p>Tick the value of the coin</p> <div style="display: flex; align-items: center; margin-top: 10px;"> <div style="display: flex; gap: 20px;"> <div style="text-align: center;"><input type="checkbox"/> 1 p</div> <div style="text-align: center;"><input type="checkbox"/> 2 p</div> <div style="text-align: center;"><input type="checkbox"/> 5 p</div> <div style="text-align: center;"><input type="checkbox"/> 10 p</div> <div style="text-align: center;"><input type="checkbox"/> 20 p</div> <div style="text-align: center;"><input type="checkbox"/> 50 p</div> <div style="text-align: center;"><input type="checkbox"/> £1</div> </div> </div>	1																														
8	<p>Tick the name of the shape</p> <div style="display: flex; align-items: center; margin-top: 10px;"> <div style="display: flex; gap: 20px;"> <div style="text-align: center;"><input type="checkbox"/> square</div> <div style="text-align: center;"><input type="checkbox"/> rectangle</div> <div style="text-align: center;"><input type="checkbox"/> triangle</div> <div style="text-align: center;"><input type="checkbox"/> hexagon</div> <div style="text-align: center;"><input type="checkbox"/> cube</div> <div style="text-align: center;"><input type="checkbox"/> cuboid</div> <div style="text-align: center;"><input type="checkbox"/> cylinder</div> <div style="text-align: center;"><input type="checkbox"/> sphere</div> </div> </div>	1																														

Date

Total

1	Read out 51 78	2																														
2	Read out forty three <table border="1" style="margin: 10px auto; text-align: center;"> <tr><td>31</td><td>32</td><td>33</td><td>34</td><td>35</td><td>36</td><td>37</td><td>38</td><td>39</td><td>40</td></tr> <tr><td>41</td><td>42</td><td style="background-color: red;">43</td><td>44</td><td>45</td><td>46</td><td>47</td><td>48</td><td>49</td><td>50</td></tr> <tr><td>51</td><td>52</td><td>53</td><td>54</td><td>55</td><td>56</td><td>57</td><td>58</td><td>59</td><td>60</td></tr> </table>	31	32	33	34	35	36	37	38	39	40	41	42	43	44	45	46	47	48	49	50	51	52	53	54	55	56	57	58	59	60	1
31	32	33	34	35	36	37	38	39	40																							
41	42	43	44	45	46	47	48	49	50																							
51	52	53	54	55	56	57	58	59	60																							
3	Fill in the missing numbers $50 + 2 = \boxed{52}$ $30 + 5 = \boxed{35}$ $40 + 3 = \boxed{43}$ $20 + 7 = \boxed{27}$	4																														
4	Work out $36 + 3 = \boxed{39}$ $28 + 10 = \boxed{38}$ $47 - 4 = \boxed{43}$ $53 - 20 = \boxed{33}$	4																														
5	Fill in the missing numbers $3 + \boxed{7} = 10$ $\boxed{6} + 4 = 10$ $10 - 3 = \boxed{7}$ $10 - 6 = \boxed{4}$	4																														
6	If there are 2 balls in each bag, how many balls are there altogether?  12 balls	1																														
7	Tick the value of the coin  <input type="checkbox"/> 1 p <input type="checkbox"/> 2 p <input type="checkbox"/> 5 p <input type="checkbox"/> 10 p <input checked="" type="checkbox"/> 20 p <input type="checkbox"/> 50 p <input type="checkbox"/> £1	1																														
8	Tick the name of the shape  <input type="checkbox"/> square <input type="checkbox"/> rectangle <input checked="" type="checkbox"/> triangle <input type="checkbox"/> hexagon <input type="checkbox"/> cube <input type="checkbox"/> cuboid <input type="checkbox"/> cylinder <input type="checkbox"/> sphere	1																														

Date

Total