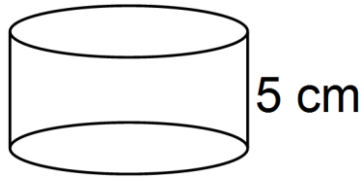


Surface Area (3)

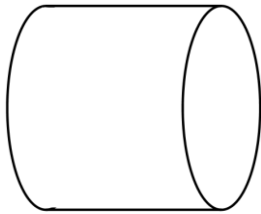


Calculate the surface area

- 1) Radius = 6 cm



- 2) Diameter = 8 cm



8 cm

- 3) Radius = 2 cm

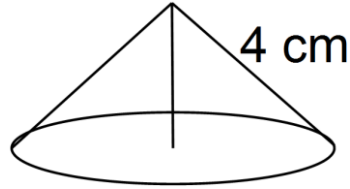


12 cm

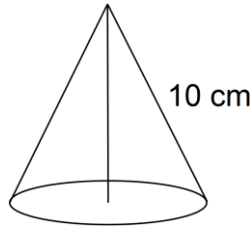


Calculate the surface area

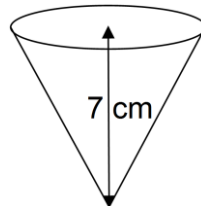
- 1) Radius = 2 cm



- 2) Radius = 4 cm

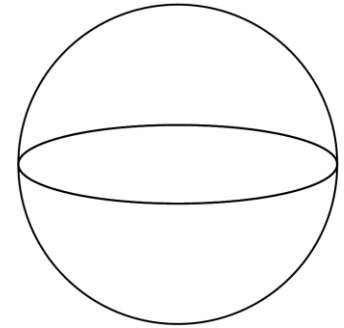


- 3) Diameter = 6 cm



Calculate the surface area

- 1) Radius = 6 cm



- 2) Diameter = 10 cm

