




Christmas Challenge 1

Help Santa create his shopping list for Christmas using the information below:

-  8 Reindeers requires 4kg of **reindeer food** each. Rudolf requires 6kg
-  Each reindeer requires 3 **carrots** each hour of the 25 hour flight
-  One roll of **wrapping paper** can wrap 500 presents. Santa needs to wrap 2500 presents
-  Santa gives each of his elves a new **hat** on christmas. He has 800 elves and hats come in packs of 40.
-  Santa requires 3 **maps** for each country he travels to. He travels to 180 countries

Working out:

Santa's Shopping List:

Reindeer Food: _____ kg

Carrots: _____

Wrapping Paper: _____

Elf Hats: _____ packs

Maps: _____